

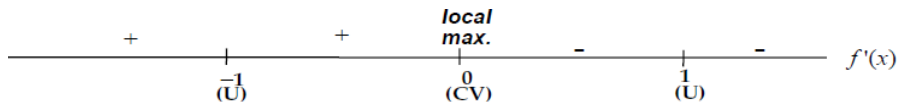
Graphing with Calculus

The Graphing Steps:

1. Find domain of $f(x)$.
2. Find *the first derivative of $f(x)$* .
3. Find **partition points (critical values and undefined values)** as follows:
 - a. Set *the first derivative of $f(x) = 0$* to find critical values.
 - b. Set the denominator of *the first derivative of $f(x) = 0$* to find undefined points.
4. Use **either First or Second Derivative Test** to determine local maxima & minima (*extrema*). Set the second derivative of $f(x) = 0$ to find critical values. Plot extrema.
5. Find other points to sketch the graph, including: (a) **intercepts**; (b) **inflection points** (second derivative sign changes) (c) **asymptotes** (see reverse side); (d) **concavity** and (e) **maximum/minimum values**.

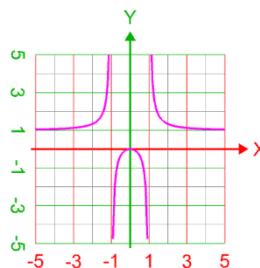
Problem 1. Use the **first derivative test** to sketch the graph of $f(x) = \frac{x^2}{x^2 - 1}$.

1. Find the **domain**. Set the denominator of $f(x)$ equal to zero, the domain is: $x \neq 1$ and $x \neq -1$.
2. Find the **first derivative of $f(x)$** . $f'(x) = \frac{-2x}{(x^2 - 1)^2}$
3. **Critical Values:**
 - a. Set the first derivative = 0 (top of $f(x) = 0$). This yields $x = 0$. Thus 0 is a **critical value**.
 - b. Set the denominator of $f(x) = 0$. This yields $x = 1$ and $x = -1$. Thus, both are critical values and will give **vertical asymptotes** on the graph.
4. **Local Extrema:** Use the **first derivative test**.
 - a. Make a sign chart using partition values. On the chart, use a test point in $f'(x)$ on each interval between partition numbers. This is a good time to use the table function (set to ask) on the calculator.
 - i. If $f'(x) > 0$, write + on the sign chart, this is where $f(x)$ is **increasing**.
 - ii. If $f'(x) < 0$, write - on the sign chart, this is where $f(x)$ is **decreasing**.
 - iii. If the sign changes from (-) to (+) you have a **local minimum**
 - iv. If the sign changes from (+) to (-) you have a **local maximum**
 - b. This would give us the following sign chart:



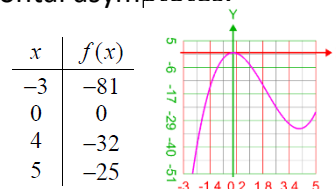
5. Now it is time to sketch our function. Since $\lim_{x \rightarrow \pm\infty} f(x) = 1$, the line $y = 1$ is a **horizontal asymptote**. We have two vertical asymptotes from step #3. Plotting other points as necessary completes the graph.

x	f(x)
-3	9/8
9/10	-81/19
0	0
4	-81/19
2	4/3
3	9/8





Problem #2. Use the **second derivative test** to graph $f(x) = x^3 - 6x^2$, on the interval $[-3,5]$, and find the absolute extrema.

- Determine the **domain**. In this case $(-\infty, \infty)$ since we don't have a fraction with domain limits.
- Calculate the **first derivative**: $f'(x) = 3x^2 - 12x$.
- Critical Values**: Set $f'(x) = 0$, this yields $x = 0$ and 4 . Thus, these are the **critical values**. Since this is not a function with a limited domain, there are no undefined points or vertical asymptotes.
- Relative Extrema**: Use the second derivative test. $f''(x) = 6x - 12$. Find $f''(0)$ and $f''(4)$.
 - Since $f''(0) = -12 < 0$, $f(0)$ is a **local maximum**.
 - Since $f''(4) = 12 > 0$, $f(4)$ is a **local minimum**.
- Concavity/ Inflection Points**: Setting $f''(x) = 0$ yields $x = 2$, so $f(x)$ has an **inflection point** at $(2, -16)$ and the graph changes concavity at $x = 2$.
 - Since $f''(x) < 0$ on $(-\infty, 2)$, this part of the graph is **concave down**.
 - Since $f''(x) > 0$ on $(2, \infty)$, this part of the graph is **concave up**.
- Absolute Extrema**: We know that $f(0)$ is a local maximum and that $f(0) = 0$ and $f(4)$ is a local minimum and $f(4) = -32$, so now we need to check the endpoints. $f(-3) = -81$ and $f(5) = -25$.
 - $f(0) = 0$ which is the largest value so it is an **absolute maximum**.
 - $f(-3) = -81$ which is the smallest so it is an **absolute minimum**.
- Now it is time to sketch the graph. Using the critical values you can get a good idea of what the function looks like. This graph would not have any vertical or horizontal asymptotes.



Second Derivative Test

A. Find $f''(x)$. B. <u>Check all CV's</u> : (i) if $f''(CV) > 0$, then $f(CV)$ is a local minimum (ii) if $f''(CV) < 0$, then $f(CV)$ is a local maximum (iii) if $f''(CV) = 0$, then test fails (use First Derivative Test)	$f''(CV) > 0$  (local min./concave up)	$f''(CV) < 0$  (local max./concave down)
---	--	---

Notes on Asymptotes:

- The line $x = c$ is a **vertical asymptote** of the graph of $f(x) = \frac{p(x)}{q(x)}$ if $q(c) = 0$ and $p(c) \neq 0$.
- The line $y = \lim_{x \rightarrow \pm\infty} f(x) = b$ is a **horizontal asymptote** of $f(x)$ if b is a constant.
 If $f(x) = \frac{p(x)}{q(x)}$, where $p(x)$ and $q(x)$ are both polynomials, and if $p(x)$ and $q(x)$ have the same degree, then the graph of $f(x)$ has a horizontal asymptote.
- The line $y = ax + b$ is an **oblique asymptote** of the graph of $f(x)$ if $\lim_{x \rightarrow \pm\infty} (f(x) - y) = 0$.
 If $f(x) = \frac{p(x)}{q(x)}$ where $p(x)$ and $q(x)$ are both polynomials, and if the degree of $p(x)$ is one more than the degree of $q(x)$, then the graph of $f(x)$ has an oblique asymptote. The equation of this asymptote is $y = Q(x) = ax + b$, where $Q(x)$ is the quotient obtained by dividing the denominator of $f(x)$ into the numerator and excluding the remainder.